



UNIVERSITY OF CAMBRIDGE INTERNATIONAL EXAMINATIONS
General Certificate of Education Ordinary Level

CANDIDATE
NAME

CENTRE
NUMBER

--	--	--	--	--

CANDIDATE
NUMBER

--	--	--	--



PAKISTAN STUDIES

2059/02

Paper 2 The Environment of Pakistan

October/November 2012

1 hour 30 minutes

Candidates answer on the Question Paper.

Additional Materials: Insert

READ THESE INSTRUCTIONS FIRST

Write your Centre number, candidate number and name in the spaces provided.

Write in dark blue or black pen.

Do not use staples, paper clips, highlighters, glue or correction fluid.

DO **NOT** WRITE IN ANY BARCODES.

Answer any **three** questions.

The Insert contains Photograph A for Question 1.

The Insert is **not** required by the Examiner.

The number of marks is given in brackets [] at the end of each question or part question.

This document consists of **22** printed pages, **2** blank pages and **1** Insert.



Answer any **three** questions.

1 (a) Study Fig. 1 which shows mineral extraction in 2008 in Pakistan.

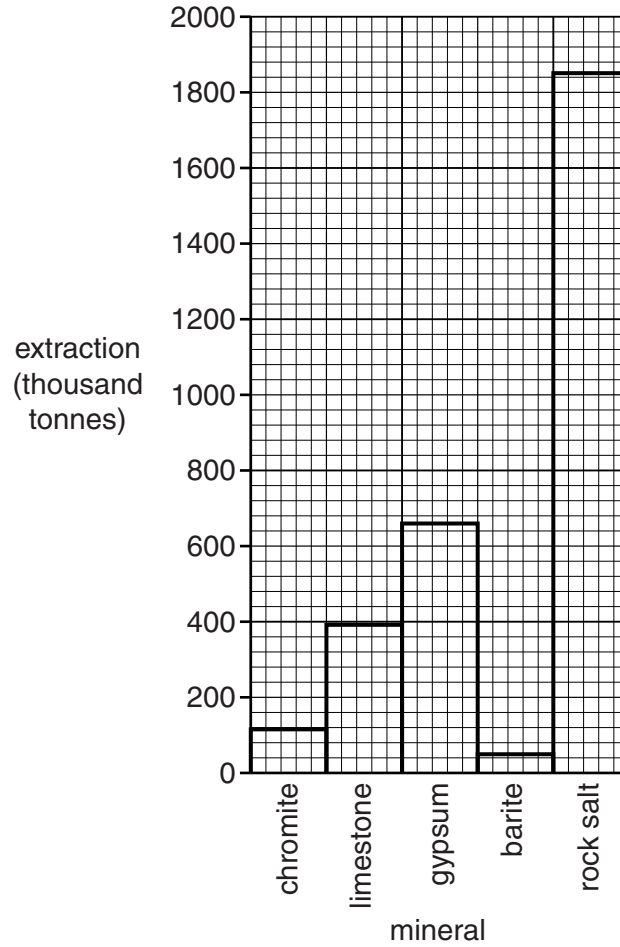


Fig. 1

(i) Name **two** minerals shown on Fig. 1 that are used to make cement.

1

2 [2]

(ii) State **two** uses of rock salt.

1

2 [2]

(iii) State the amount of gypsum extracted.

..... [1]

(b) Study Fig. 2 which shows chromite extraction in Pakistan.

For
Examiner's
Use

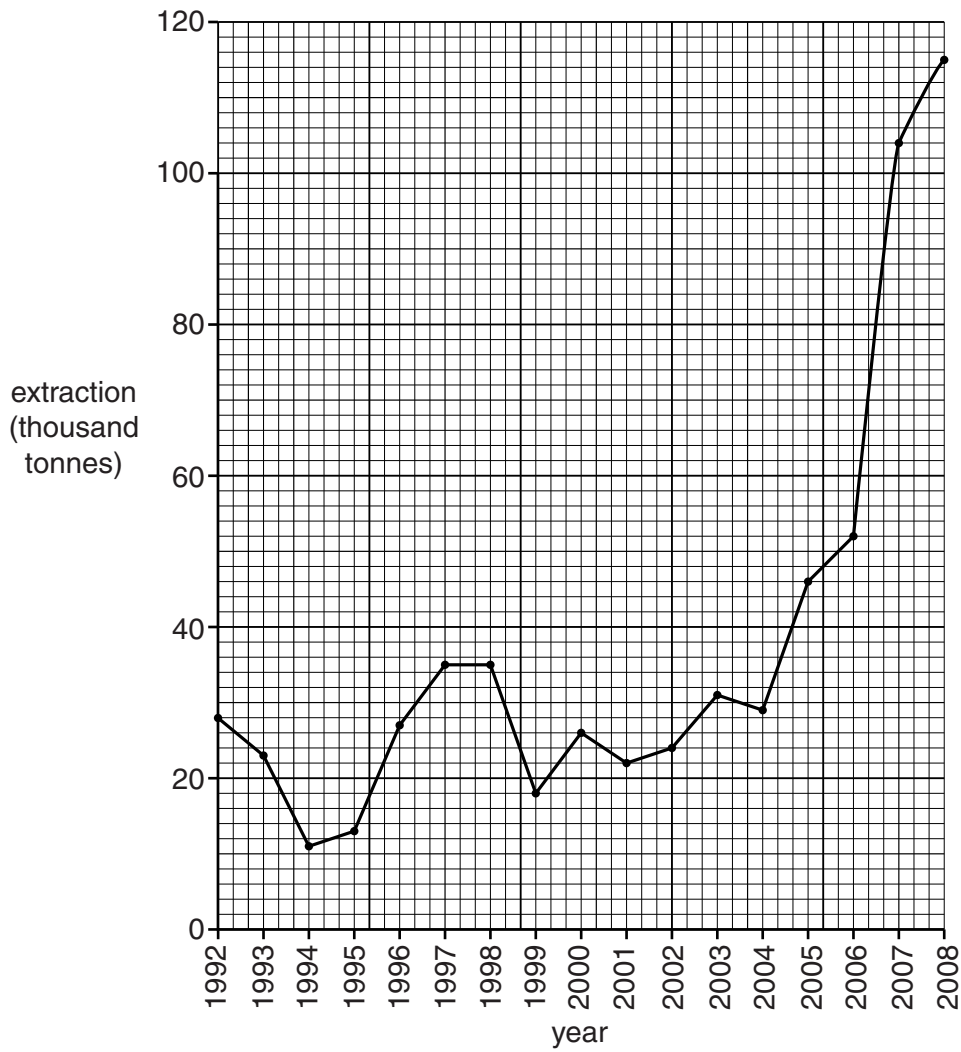


Fig. 2

(i) Describe the changes in extraction from 1992 to 2008.

.....

.....

.....

.....

.....

.....

.....

.....

.....

.....

.....

.....

[3]

(ii) Suggest why the extraction of minerals, such as chromite, varies from year to year.

.....
.....
.....
.....
.....
.....
.....[3]

(c) Study Photograph A (Insert) which shows a quarry in Pakistan.

(i) Use the photograph and your own knowledge to describe the environmental problems that can be caused by mineral extraction.

.....
.....
.....
.....
.....
.....
.....
.....
.....
.....
.....
.....
.....
.....[4]

(ii) How can these problems be reduced?

.....
.....
.....
.....
.....
.....
.....
.....
.....
.....
.....
.....
.....

For
Examiner's
Use

[4]

(d) To what extent can more extraction of mineral resources help to increase development in Pakistan?

.....
.....
.....
.....
.....
.....
.....
.....
.....
.....
.....
.....
.....
.....
.....
.....
.....
.....
.....
.....
.....
.....
.....
.....
.....
.....
.....
.....
.....
.....
.....
.....
.....
.....
.....
.....
.....
.....
.....
.....
.....
.....
.....
.....
.....
.....
.....
.....
.....

[6]

[Total: 25]

[Turn over

2 (a) Study Fig. 3 which shows the climate of Karachi.

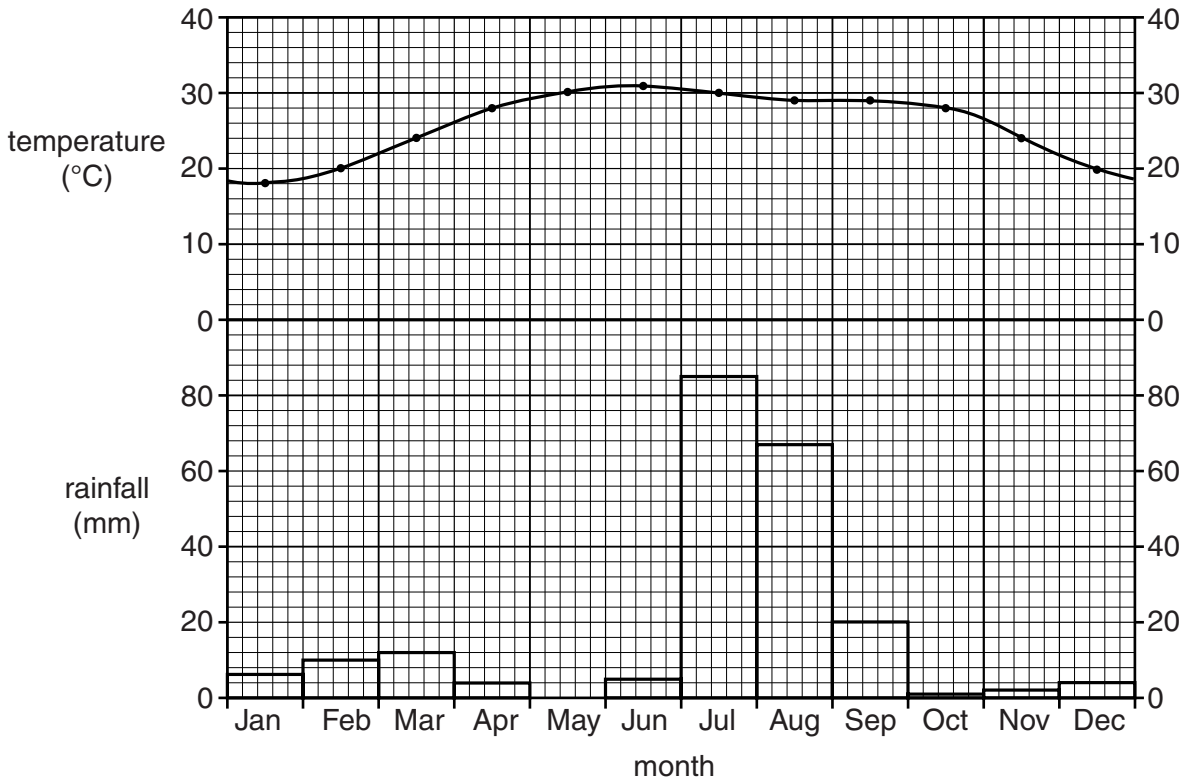


Fig. 3

(i) By how much does the temperature rise from January to May?

..... [1]

(ii) Describe the pattern of rainfall during the winter season from October to March.

.....

 [2]

3 (a) Study Fig. 4 which shows an irrigation system.

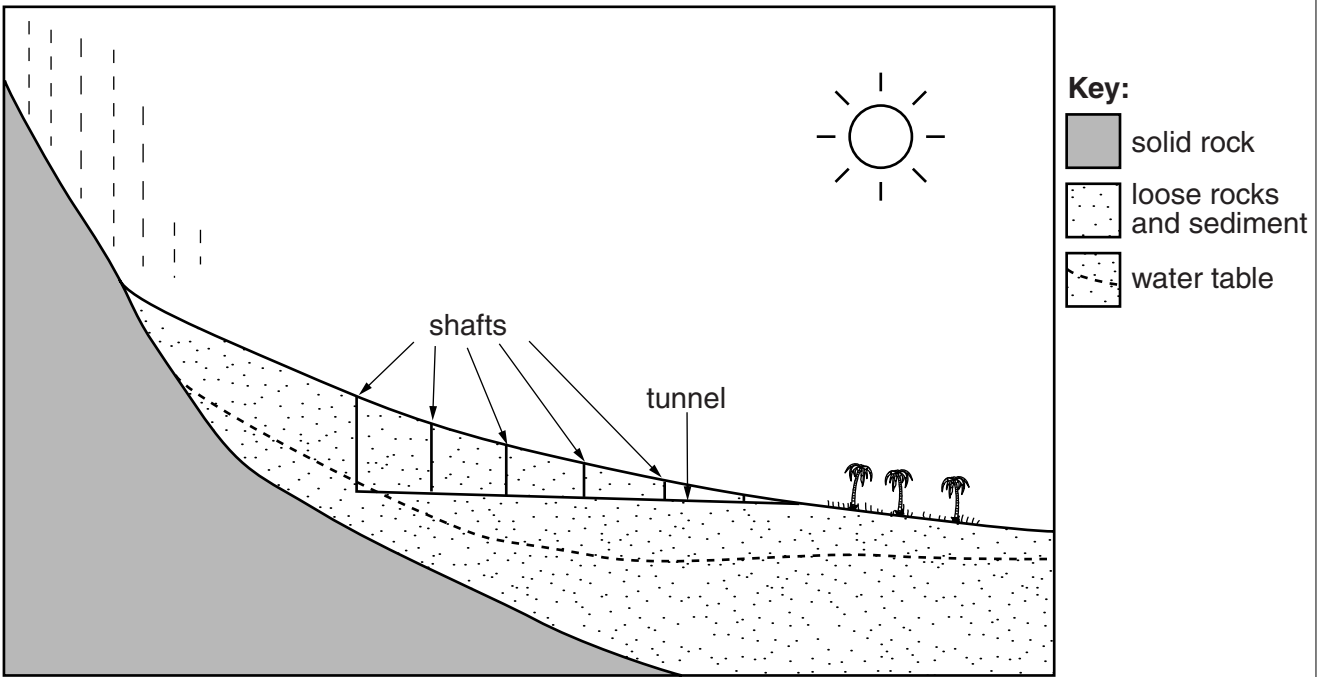


Fig. 4

(i) Name the irrigation system shown in Fig. 4.

.....[1]

(ii) Name an area of Pakistan where it is used.

.....[1]

(iii) Explain how this system provides water for agriculture in this area.

.....
.....
.....
.....
.....
.....
.....
.....
.....
.....
.....
.....
.....[4]

(iv) Name a fruit crop grown in this area.

.....[1]

(b) Study Fig. 5 which shows the results of a land-use survey in Pakistan in 2008.

For
Examiner's
Use

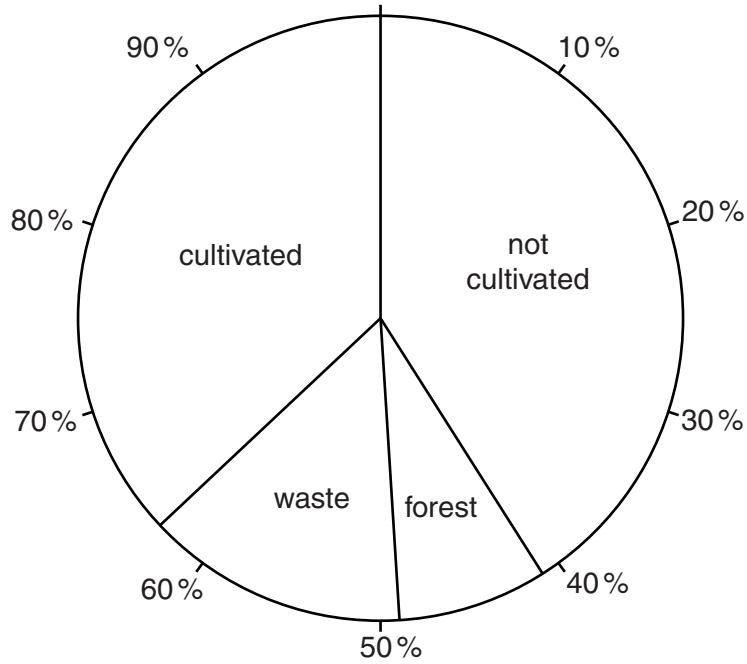


Fig. 5

(i) What percentage of land is cultivated?

..... [1]

(ii) What percentage of land is waste?

..... [1]

(iii) Explain how soils are damaged by waterlogging and salinity.

.....

.....

.....

.....

.....

.....

.....

.....

.....

.....

.....

..... [4]

(iv) Explain **three** reasons, other than by waterlogging and salinity, why over half the land was not cultivated when the survey was made.

*For
Examiner's
Use*

1

.....

.....

.....

.....

2

.....

.....

.....

.....

3

.....

.....

.....

.....

[6]

(c) To what extent could government action increase agricultural production in Pakistan?

*For
Examiner's
Use*

.....
.....
.....
.....
.....
.....
.....
.....
.....
.....
.....
.....
.....
.....
.....
.....
.....
.....
.....
.....
.....

[6]

[Total: 25]

4 (a) Study Fig. 6 which shows the distribution of the cotton textile industry in Pakistan.

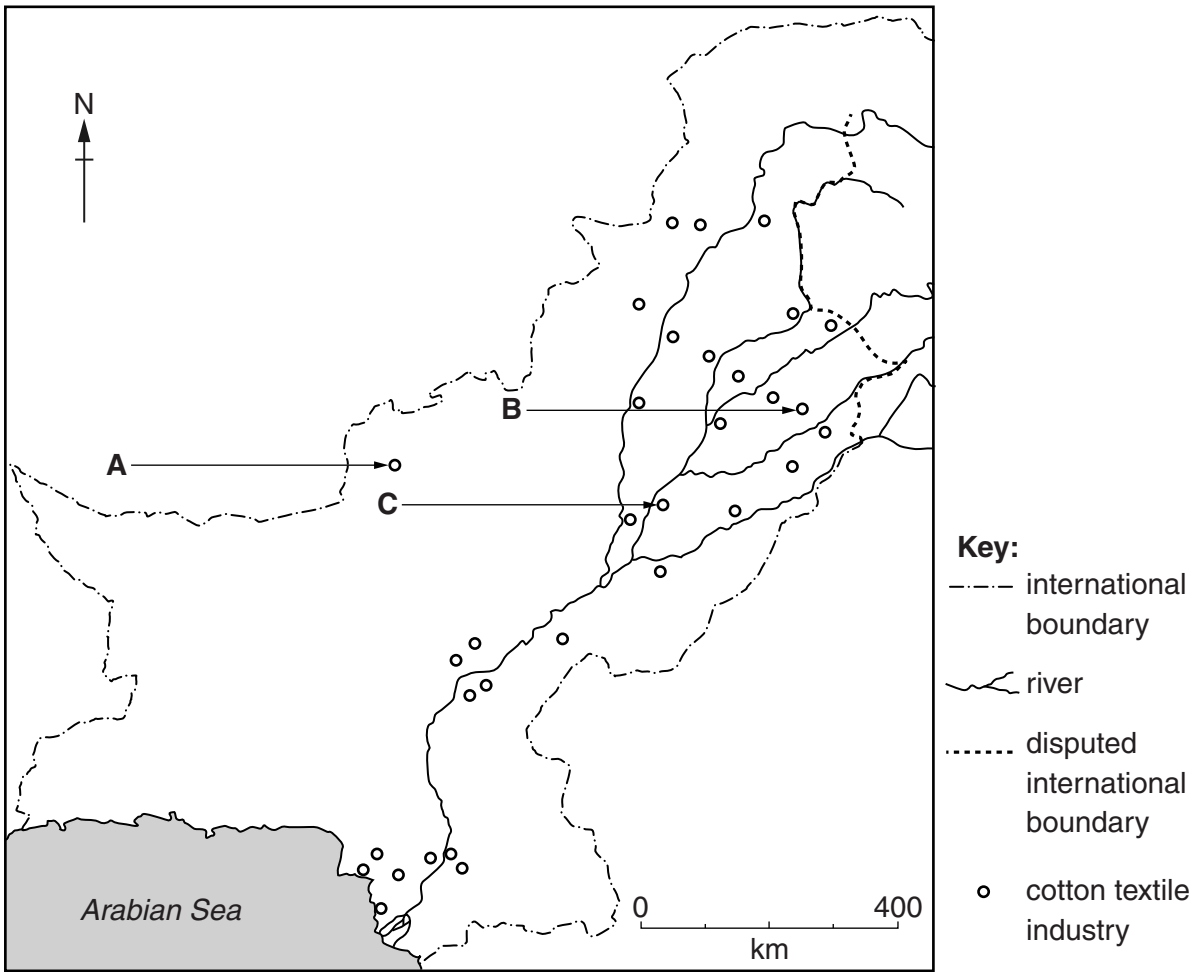


Fig. 6

(i) Name the main centres of the cotton textile industry **A**, **B** and **C**.

A

B

C [3]

(ii) Describe the distribution of the cotton textile industry.

*For
Examiner's
Use*

.....

.....

.....

.....

.....

.....

.....

.....[3]

(b) Study Fig. 7 which shows the output of yarn and cloth between 1999 and 2008.

For
Examiner's
Use

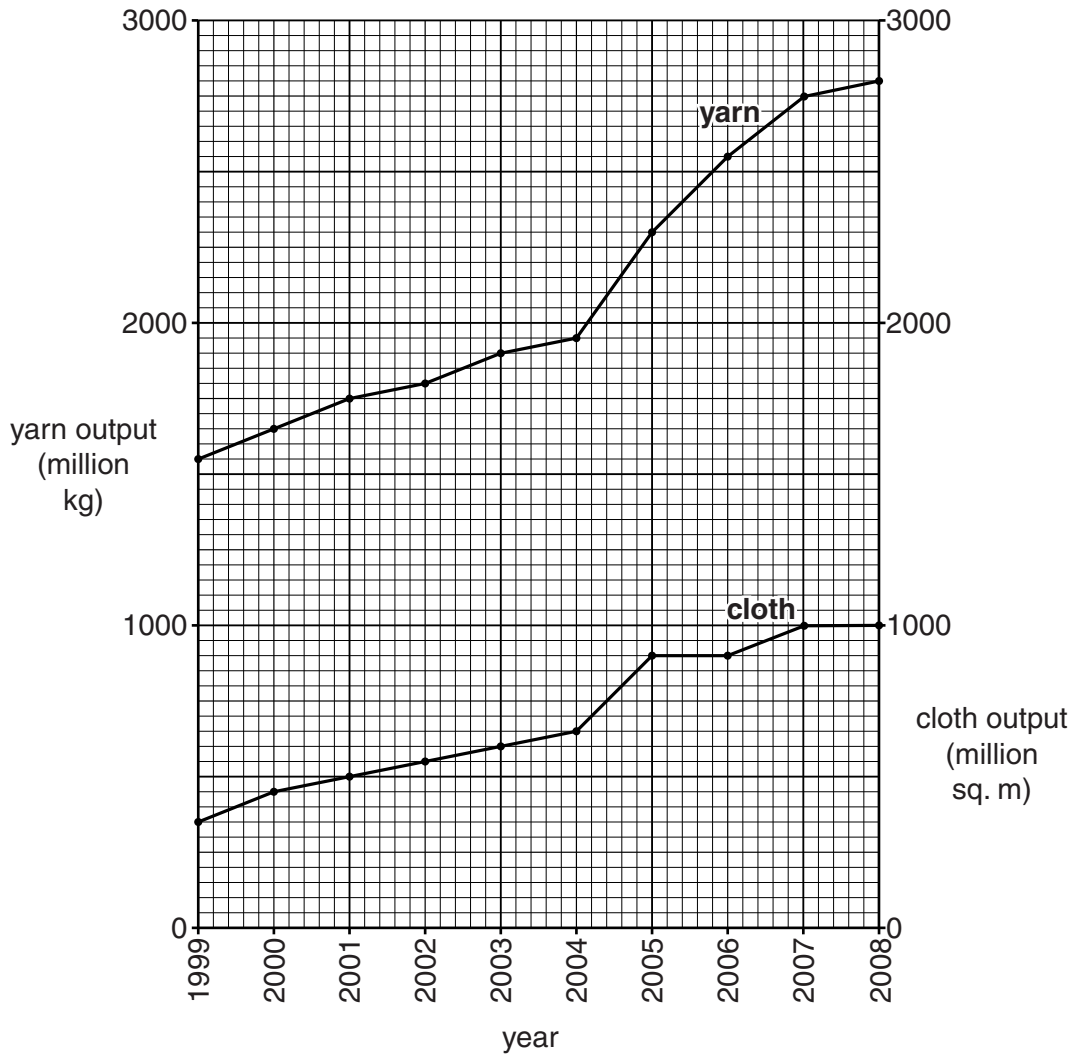


Fig. 7

(i) Compare the outputs of cotton yarn and cotton cloth from 1999 to 2008 shown on Fig. 7.

.....

.....

.....

..... [2]

(ii) Suggest **one** reason for the difference in output of cotton yarn and cotton cloth, and explain your answer.

.....

.....

.....

.....

..... [2]

(c) (i) Give an example of a job in each of the primary, secondary and tertiary sectors of the cotton industry.

Primary

Secondary

Tertiary [3]

(ii) How is the proportion of workers employed in each of these sectors changing?

.....
.....
.....
.....
.....
.....
.....
.....
.....
..... [3]

(iii) Explain why the changes you have stated in **(c)(ii)** may lead to unemployment.

.....
.....
.....
.....
.....
.....
.....
..... [3]

5 (a) Study Fig. 8 which shows birth and death rates in Pakistan from 1990 to 2005.

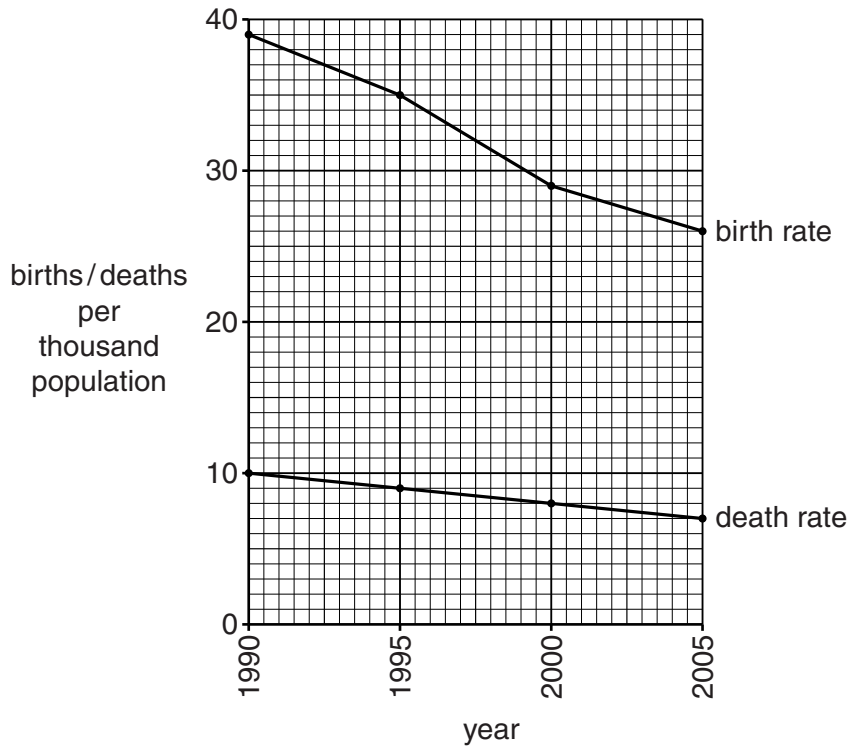


Fig. 8

(i) State the birth rate and death rate in the year 2005.

Birth rate

Death rate [2]

(ii) By how much has each decreased since 1990?

Birth rate

Death rate [2]

(b) Study Fig. 9 which shows birth and death rates of a country.

For
Examiner's
Use

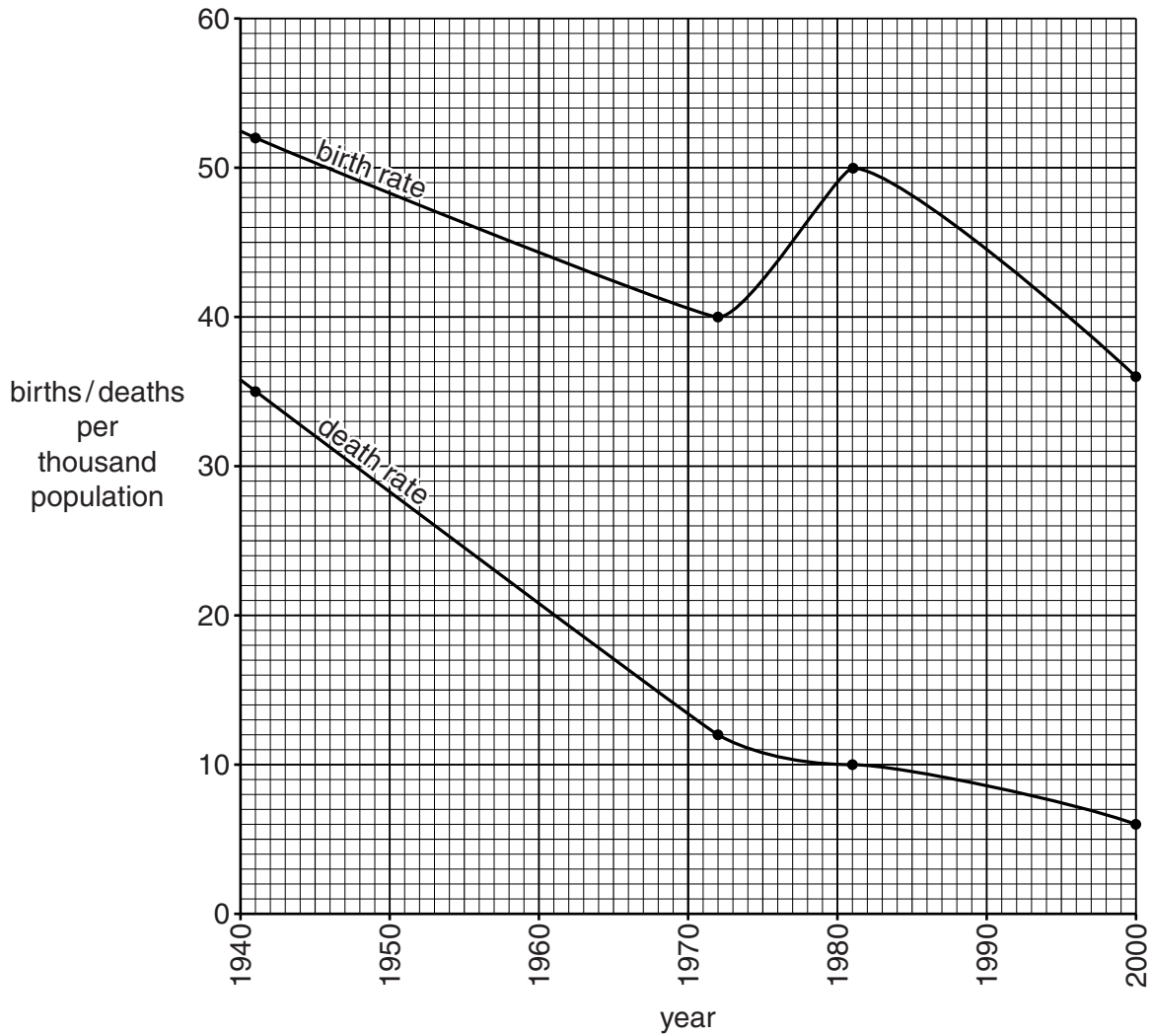


Fig. 9

(i) Describe the main changes in birth rate from 1941 to 2000.

.....

.....

.....

.....

.....

.....

..... [4]

(ii) Complete the following:

NATURAL INCREASE = minus [2]

(iii) Study Fig. 9 again. Circle the year (below) in which the natural population increase was greatest.

1941 1972 1981 2000 [1]

(c) (i) Explain the difference between emigration and immigration.

.....
..... [2]

(ii) Explain the advantages and disadvantages of international emigration for the people of Pakistan.

.....
.....
.....
.....
.....
.....
.....
.....
.....
.....
.....
.....
.....
.....
.....
.....
.....
.....
.....
..... [6]

[Total: 25]

BLANK PAGE

Copyright Acknowledgements:

Questions 1, 2, 3, 4, 5 © www.statpak.gov.pk
Figures 1, 2, 5, 7, 8, 9 © www.statpak.gov.pk
Question 1 Photograph A Julia Grover © UCLES

Permission to reproduce items where third-party owned material protected by copyright is included has been sought and cleared where possible. Every reasonable effort has been made by the publisher (UCLES) to trace copyright holders, but if any items requiring clearance have unwittingly been included, the publisher will be pleased to make amends at the earliest possible opportunity.

University of Cambridge International Examinations is part of the Cambridge Assessment Group. Cambridge Assessment is the brand name of University of Cambridge Local Examinations Syndicate (UCLES), which is itself a department of the University of Cambridge.